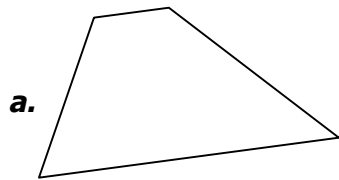
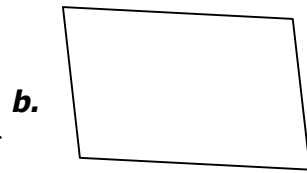


Tracer les diagonales des 16 quadrilatères suivants puis les étudier à l'aide des tableaux dont voici le mode d'emploi :

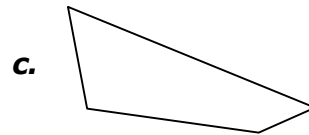
COTÉS		ANGLES DROITS		DIAGONALES	
2 cotés opposés égaux	A	1 ou 2	♣	Même milieu	1
2 cotés opposés égaux et parallèles	B				
2 cotés consécutifs égaux	C				
cotés opposés égaux 2 à 2	D				
cotés opposés parallèles 2 à 2	E			Même longueur	2
		Plus de 2	♥	Perpendiculaires	3



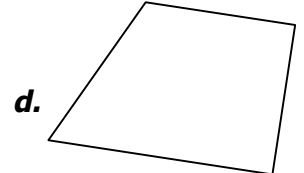
A	B	C	D	E
♣			♥	
1	2	3		



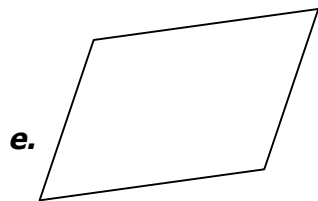
A	B	C	D	E
♣			♥	
1	2	3		



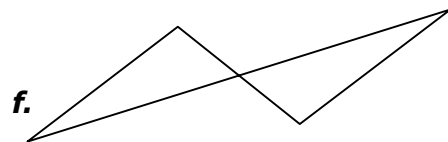
A	B	C	D	E
♣			♥	
1	2	3		



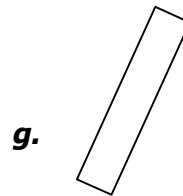
A	B	C	D	E
♣			♥	
1	2	3		



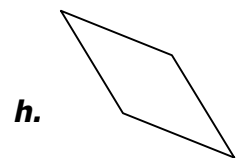
A	B	C	D	E
♣			♥	
1	2	3		



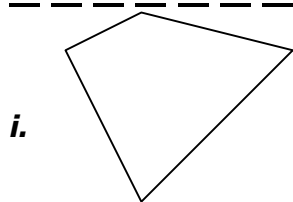
A	B	C	D	E
♣			♥	
1	2	3		



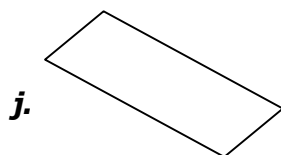
A	B	C	D	E
♣			♥	
1	2	3		



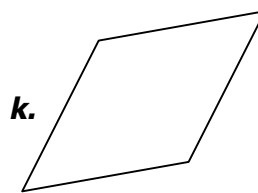
A	B	C	D	E
♣			♥	
1	2	3		



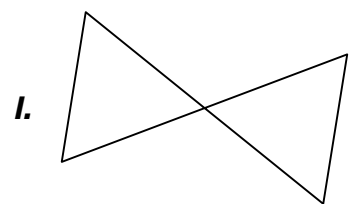
A	B	C	D	E
♣			♥	
1	2	3		



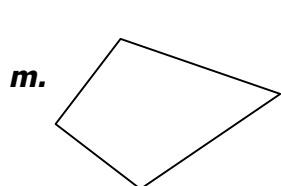
A	B	C	D	E
♣			♥	
1	2	3		



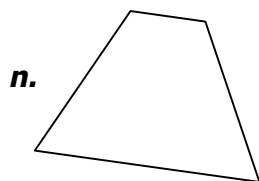
A	B	C	D	E
♣			♥	
1	2	3		




A	B	C	D	E
♣			♥	
1	2	3		




A	B	C	D	E
♣			♥	
1	2	3		



A	B	C	D	E
♣			♥	
1	2	3		



A	B	C	D	E
♣			♥	
1	2	3		



A	B	C	D	E
♣			♥	
1	2	3		